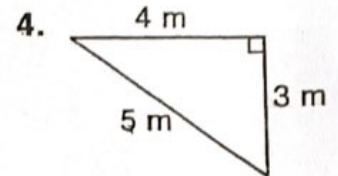
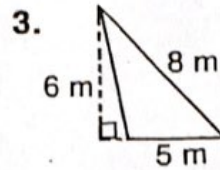
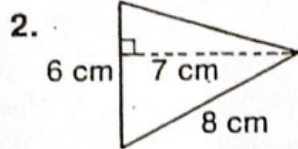
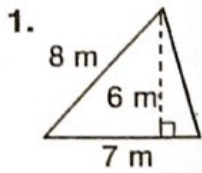
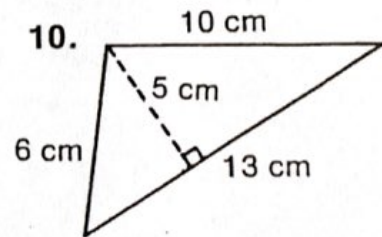
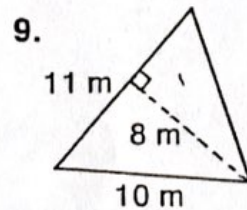
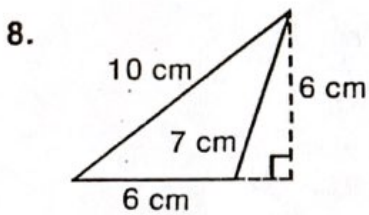
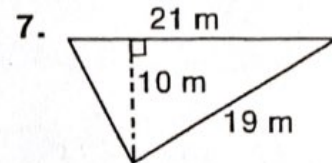
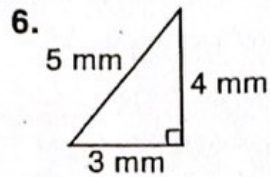
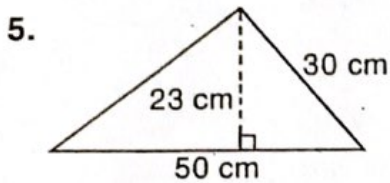


Write the measure of the base.



Find the area.



11. base 11 cm
height 9 cm

12. base 12 m
height 9 m

13. base 5 km
height 8 km

Solve.

14. A triangular flag has a base of 12 cm and a height of 15 cm. What is its area?

15. What would it cost to make a sail with a base of 4 m and a height of 5 m? Each square metre costs \$10.00.