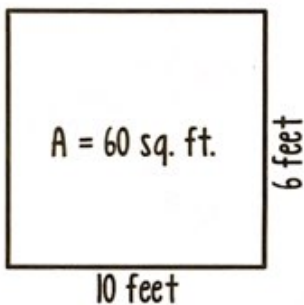


# Be the Teacher!

Mr. Numbers, the math teacher, asked his students to draw a square with a perimeter of 32. He then wanted his students to find the area. Here is the work that Anna, Brooke, and Caleb did. Are any of them right? If YOU were the teacher, what comment would you write for each student?

Anna's work



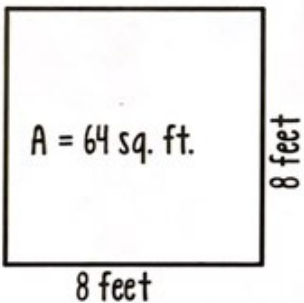
---

---

---

---

Brooke's work



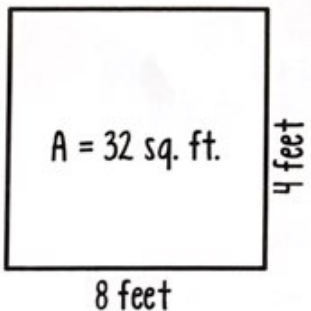
---

---

---

---

Caleb's work



---

---

---

---